

## Group 1 Homework

11.10.19

Spelling and maths tested on:  
Friday 18.10.19

Other task: Wednesday 16. 10.19

Please practise your spellings using  
spelling shed and your spelling  
journal.

## Mental maths homework:

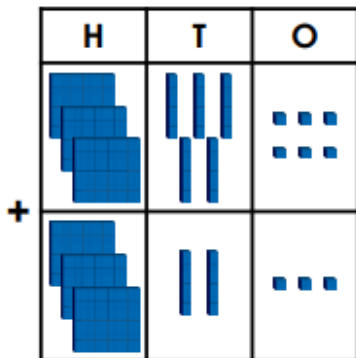
Know by heart all multiplication  
and division facts for the 2 x  
table.



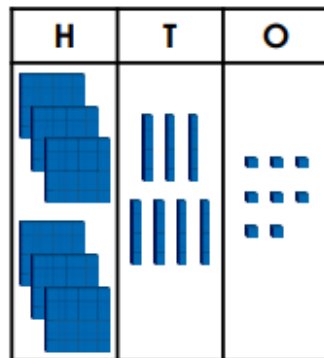
Times tables rockstar practise.

1. Match  $356 + 323$  to the correct representation.

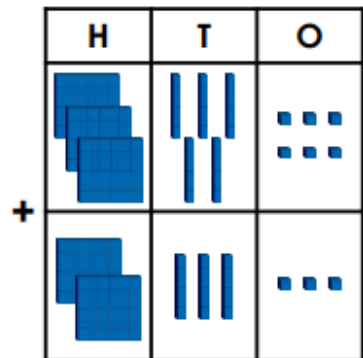
A.



B.



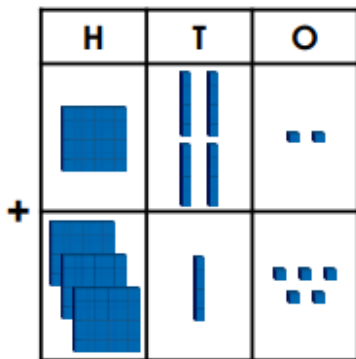
C.



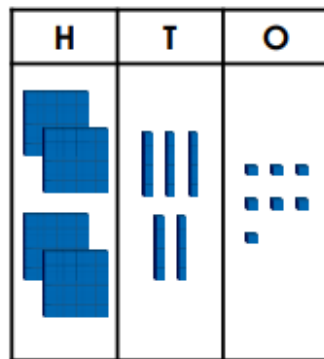
VF  
HW/Ext

2. Which is the odd one out?

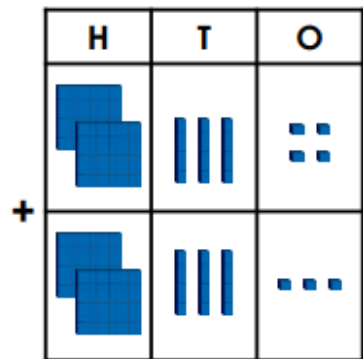
A.



B.



C.



VF  
HW/Ext