

Mental maths homework:

To know by heart all subtraction facts to 20.

Questions such as this will be given:







$17-3=$

$14-2=$

$16-8=$

The first number will not exceed 20.

Complete the sentences to describe the groups. Then write your own sentences describing the number of groups and the number of stars in each.

 <p>There are _____ equal groups.</p> <p>There are _____ stars in each group.</p>	 <p>There are _____ groups of _____.</p>
 <p>There are _____ groups of _____.</p>	 <p>_____</p> <p>_____</p>
 <p>True or false?</p> <p>There are 3 groups of 6.</p> <p>_____</p>	 <p>_____</p> <p>_____</p>