

Group 1 Homework 09.02.24

Spelling and maths tested on: Friday
24.02.24

Other task: Wednesday 21.02.24

Please practise your spellings using your
spelling journal.

Mental maths homework:



Times tables practise:

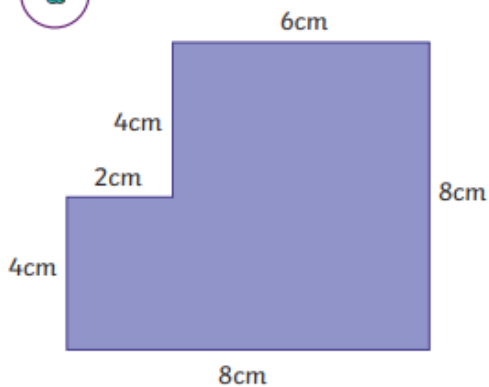
Learn your 5 times tables from 7×5
to 12×5 so that it takes you less than
5 seconds to say the answer. Keep
learning through songs and games to
make it fun!

Times Tables Rockstar practise.

Can you work out the perimeter of these rectilinear
shapes? Remember to add all the lengths of the
sides together.

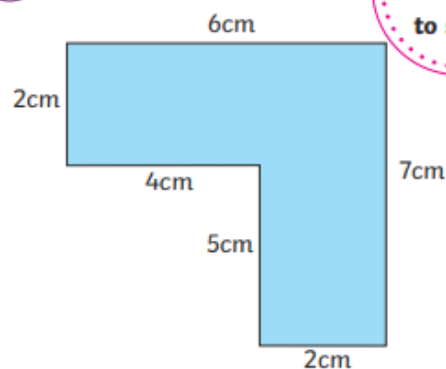
1) Calculate the perimeter of these shapes. Show the calculation you did
to find the answer.

a



Calculation:

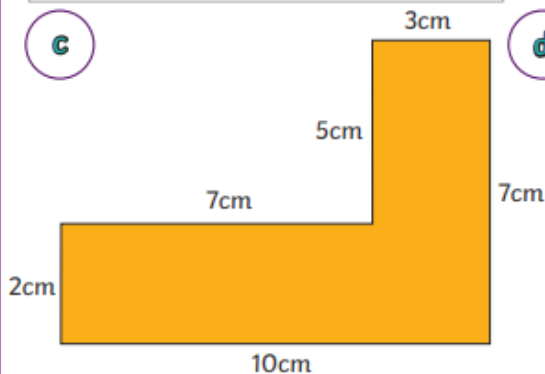
b



Calculation:

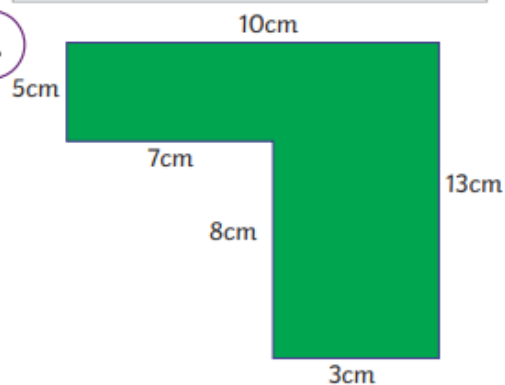
Shapes
not drawn
to scale

c



Calculation:

d



Calculation: