

Group 2 Homework 09.02.24

Spelling and maths tested on: Friday
24.02.24

Other task: Wednesday 21.02.24

Please practise your spellings using your
spelling journal.

Mental maths homework:



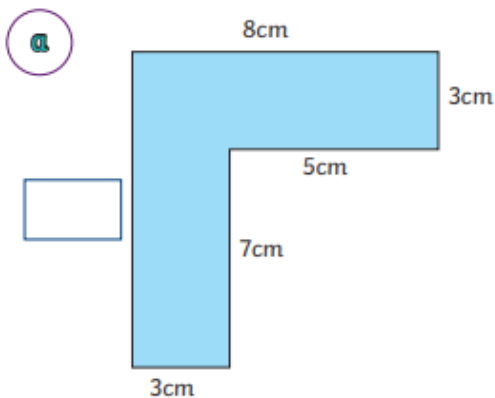
Times tables practise:

Learn your 3 times tables from 1×3 to
 7×3 so that it takes you less than 5
seconds to say the answer. Keep
learning through songs and games to
make it fun!

Times Tables Rockstar practise.

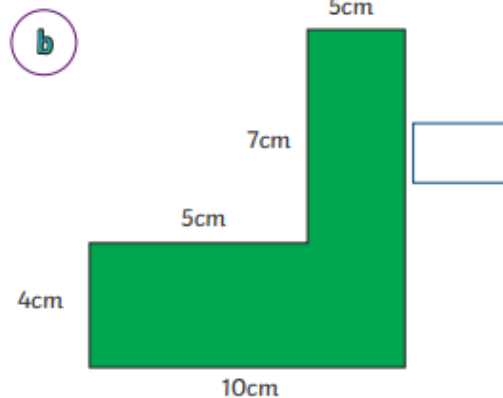
Remember to add all the lengths of the sides
together to find the perimeter.

2) In these shapes there is a missing side. Calculate the length of the missing side and then
work out the perimeter. Show the calculation you used for the missing side and also
the perimeter.



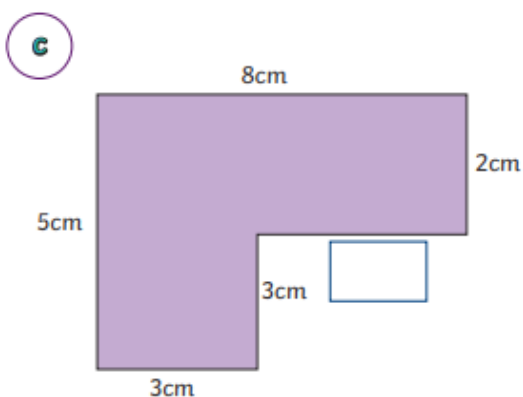
Missing side:

Perimeter:



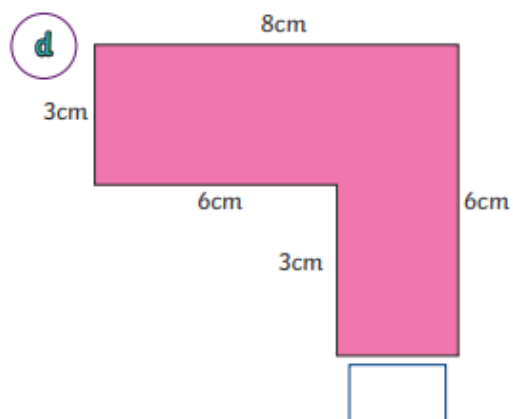
Missing side:

Perimeter:



Missing side:

Perimeter:



Missing side:

Perimeter: