

### Group 3 Homework 09.02.24

Spelling and maths tested on: Friday  
24.02.24

Other task: Wednesday 21.02.24

Please practise your spellings using your  
spelling journal.

### Mental maths homework:



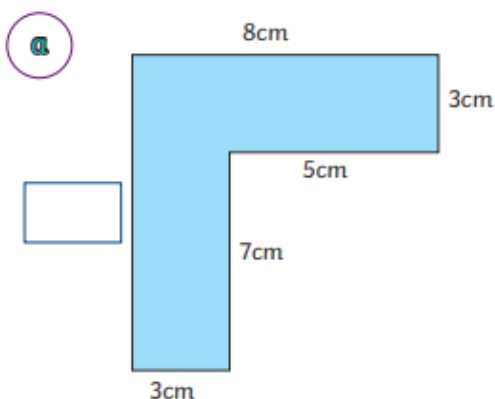
**Times tables practise:**

Learn your 9 times tables from  $7 \times 9$   
to  $12 \times 9$  so that it takes you less than  
5 seconds to say the answer. Keep  
learning through songs and games to  
make it fun!

**Times Tables Rockstar practise.**

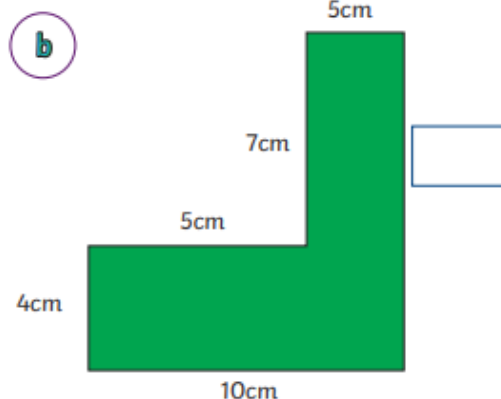
Remember to add all the lengths of the sides  
together to find the perimeter.

2) In these shapes there is a missing side. Calculate the length of the missing side and then  
work out the perimeter. Show the calculation you used for the missing side and also  
the perimeter.



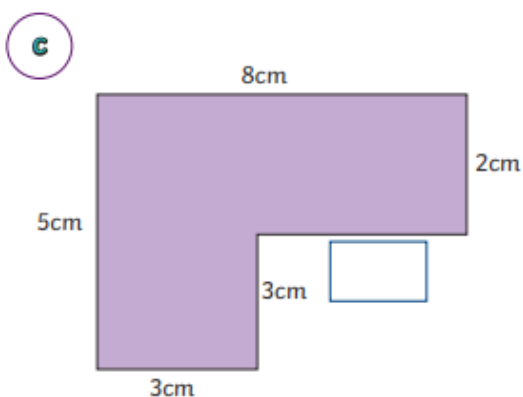
Missing side:

Perimeter:



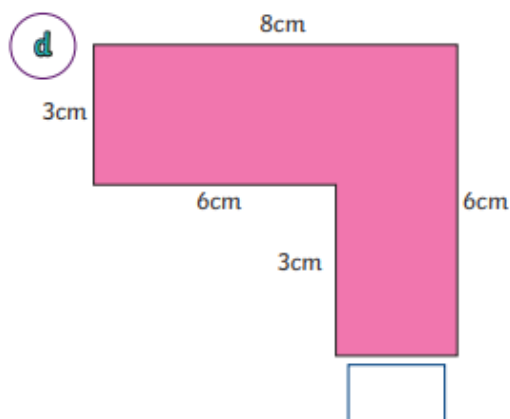
Missing side:

Perimeter:



Missing side:

Perimeter:



Missing side:

Perimeter: