

## Group 1 Homework 01.03.24

Spelling will now be tested on a

**Thursday - 07.03.24**

Mental maths will be tested on: Friday  
08.03.24

Other task: Wednesday 06.03.24

## Mental maths homework:



Times tables practise:

Practice your 3 times tables from  $0 \times 3$  to  $6 \times 3$  so that you can say the answer in less than 5 seconds. You will be tested on a mixture of questions from both these tables.

Remember to use Times Tables Rockstar at home too!

This week we have set up a times tables battle on times tables rockstars.

Year 3 will be battling Y4 to see which year group manages to practise the most.


Please log in at home and practise speeding up your times tables. There will be a reward for the winning year group!

(Your login is in your reading journal)

## Equivalent Fractions

These fractions are equivalent. The rectangles are the same. The amount shaded is equivalent.

$\frac{3}{12}$




=



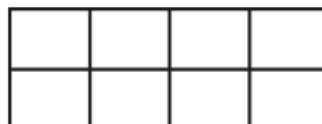
$\frac{1}{4}$

Shade the second shape to be equivalent to the first and write the equivalent fractions.



$\frac{1}{4}$

=



—



$\frac{2}{3}$

=



—

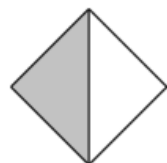


$\frac{4}{10}$

=



—




—

=




—



—

=



—