

### Group 3 Homework 01.03.24

Spelling will now be tested on a

**Thursday - 07.03.24**

Mental maths will be tested on: Friday  
08.03.24

Other task: Wednesday 06.03.24

### Mental maths homework:



Times tables practise:

Practice your 7 times tables from  $0 \times 7$  to  $6 \times 7$  so that you can say the answer in less than 5 seconds. You will be tested on a mixture of questions from both these tables.

Remember to use Times Tables Rockstar at home too!

This week we have set up a times tables battle on times tables rockstars.

Year 3 will be battling Y4 to see which year group manages to practise the most.


Please log in at home and practise speeding up your times tables. There will be a reward for the winning year group!

(Your login is in your reading journal)


### Equivalent Fractions

These fractions are equivalent. The rectangles are the same. The amount shaded is equivalent.

$\frac{4}{6}$




=




$\frac{2}{3}$


Write the fraction of each shape that is shaded and draw a line to match equivalent fraction.



-



-



-




-




-



-



-



-



-



-