

### Group 4 Homework 01.03.24

Spelling will now be tested on a

**Thursday - 07.03.24**

Mental maths will be tested on: Friday  
08.03.24

Other task: Wednesday 06.03.24

### Mental maths homework:



8.1 count from any number in steps of 6.

e.g. 6 more than 23 = 29

6 more than 45 = 51 etc

Remember to use Times Tables Rockstar at home too!

This week we have set up a times tables battle on times tables rockstars.

Year 3 will be battling Y4 to see which year group manages to practise the most.


Please log in at home and practise speeding up your times tables. There will be a reward for the winning year group!

(Your login is in your reading journal)

### Equivalent Fractions

These fractions are equivalent. The rectangles are the same. The amount shaded is equivalent.

$\frac{4}{6}$

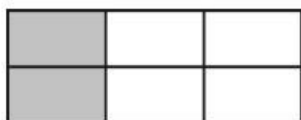


=




$\frac{2}{3}$


Write the fraction of each shape that is shaded and draw a line to match equivalent fraction.



—




—



—




—




—




—




—



—



—



—