


Mental maths homework:

To say 1 less than any number to 20.

Eg. 1 less than 18

1 less than 14

1. Match these shapes to the correct labels.



cylinder

triangle

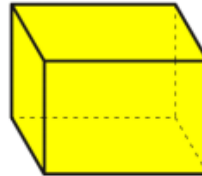
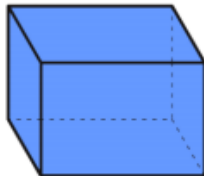

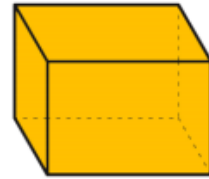
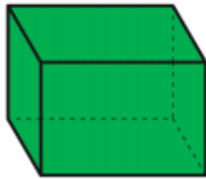
cone

circle



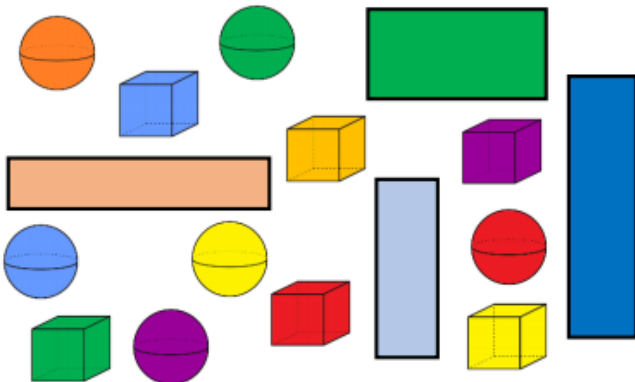
VF
HW/Ext

2. Tick the squares and circle the cuboids.



VF
HW/Ext

3. Sam is making a tally chart of all the shapes he can see.



Shape	Number of Shapes
Rectangle	
Sphere	
Cube	

Find and correct his mistakes.



RPS
HW/Ext

The Whoopsit

- 8 The whoopsit has nine claws on his big
17 paws. His fur is black and brown. He lurks
27 in a dark cave at the top of a hill.
39 The cave is so high up that it is near the clouds.
48 He sings a tune all day long in the
56 summer. He likes to shout and moan in
58 the winter.
67 We saw his footprints in the mud near the
74 river. Some people are afraid of the
84 whoopsit but I am not. I hope that I can
93 meet him and we can play games all day
94 long.



Read Together Quick Questions



1. Where does the whoopsit live?



2. Do you think that the whoopsit is happier in the summer or in the winter?



3. Find and copy one word that describes how some people feel about the whoopsit.



4. What do you think that the child and the whoopsit might play if they met?
